


Draw the time



1 It's half past twelve.



2 It's three o'clock.




3 It's nine o'clock.




4 It's half past seven.




5 It's eleven o'clock.




6 It's half past four.



7 It's five o'clock.



Write and say



It's half past eight.



Write the time

